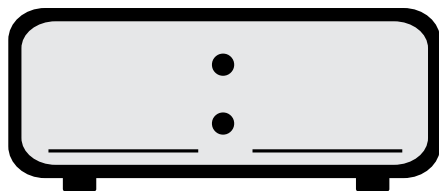
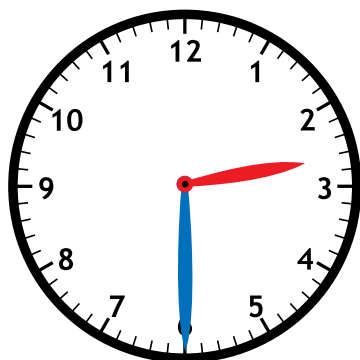


Name: _____



Math Buzz

Fill in the time on the digital clock to show the same time on the analog clock.



Maya and Jaxon were playing a trivia game together. Jaxon scored 73 points and Maya scored 64 points. What was their combined score?

Show your work

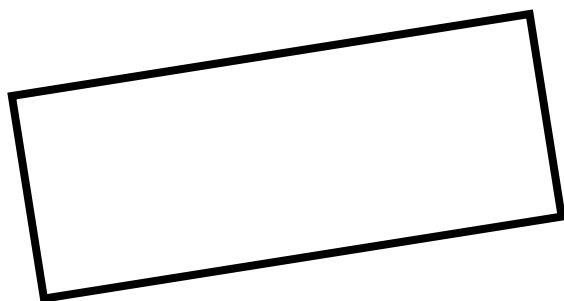
Jaxon: **73 points**

Maya: **64 points**



answer:

_____ points



How many sides does the rectangle have?

answer: _____

How many angles does the rectangle have?

answer: _____

Write the numbers in expanded form.

78 _____

157 _____

293 _____


Subtract.

933 - 678 = _____
























849
- 750

321
- 125

Name: _____



Math Buzz

Class Pets									
Dogs									
Cats									
Fish									
Hamsters									

Each  = 1 pet

How many more students have dogs than hamsters? _____


How many fewer students have fish than cats? _____

Write the numbers in standard form.

seven hundred sixteen

nine hundred forty-one

About how long is a pencil?



8 inches

8 feet

80 inches

Add.

$$\begin{array}{r} 246 \\ + 381 \\ \hline \end{array}$$

$$248 + 409 = \underline{\hspace{2cm}}$$

$$701 + 882 = \underline{\hspace{2cm}}$$

There are 95 pages in the chapter book Alina is reading. She read 26 pages so far. How many pages does she have left to read?

Show your work

answer: _____ pages

Name: _____





Math Buzz

Write the numbers in standard form.

$$80 + 9 \underline{\hspace{2cm}}$$

$$400 + 20 + 9 \underline{\hspace{2cm}}$$

Draw straight lines to divide each shape into 4 equal parts




Malik has 1 quarter, 3 dimes, 1 nickel and 2 pennies. How much money does Malik have?

Show your work

answer: _____ ¢

How many cookies are there in all?




answer: _____ cookies



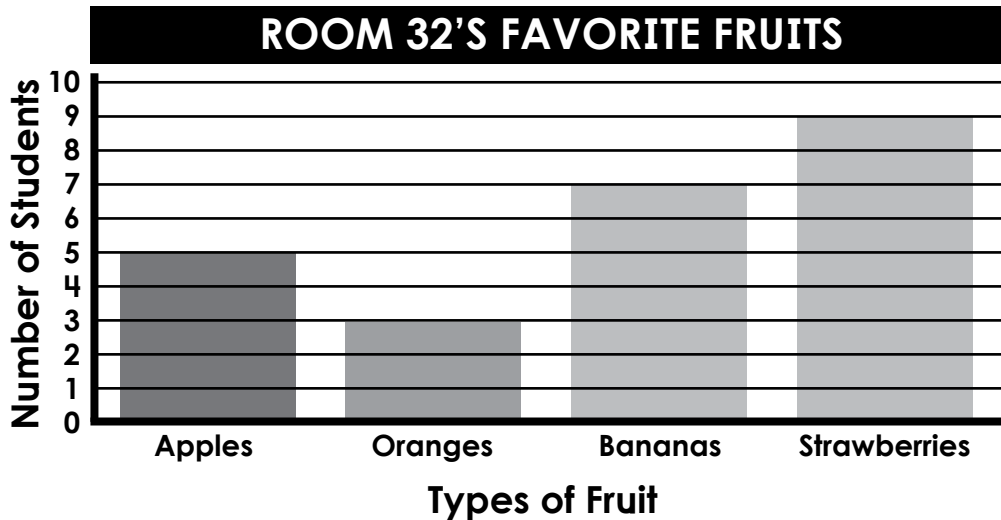
How much money is shown?

answer: _____

Name: _____




Math Buzz



How many more students chose strawberries over oranges?

How many fewer students chose apples over bananas?

Color the even numbers red.
Color the odd numbers blue.




745

Add 10

Add 100

About how long is an eraser?



6 millimeters

6 centimeters

60 centimeters

Leila had 75¢. She gave her brother one dime and one nickel. How much money does she have left?

Show your work

answer: _____ ¢

Name: _____



Math Buzz

Compare each set of numbers
using $>$, $<$, $=$.

34 _____ 28

456 _____ 645

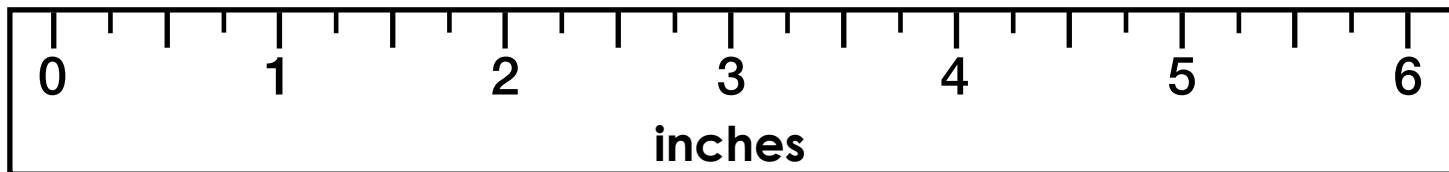
793 _____ 643

678

Subtract 10

Subtract 100

How long is the crayon?

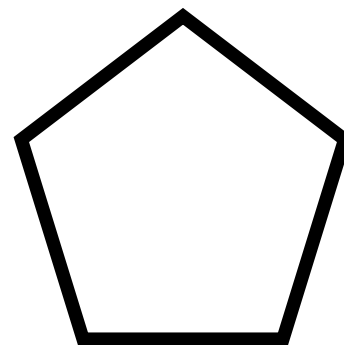


The crayon is _____ inches long.

Donovan is making costumes for the school play. He sewed together two pieces of fabric that were each 16 inches long to make a belt. What is the total length of the belt?

Show your work

answer: _____ inches



How many sides? _____

How many angles? _____



Fill in the time on the digital clock to show the same time on the analog clock.



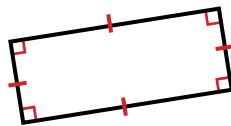
2:30

Maya and Jaxon were playing a trivia game together. Jaxon scored 73 points and Maya scored 64 points. What was their combined score?

$$73 + 64 = 137$$

answer:

137 points



How many sides does the rectangle have?

answer: **4**

How many angles does the rectangle have?

answer: **4**

Write the numbers in expanded form.

$$78 = 70 + 8$$

$$157 = 100 + 50 + 7$$

$$293 = 200 + 90 + 3$$

Subtract.

$$933 - 678 = 255$$

$$\begin{array}{r} 7\ 14 \\ 849 \\ - 750 \\ \hline 99 \end{array}$$

$$\begin{array}{r} 2\ 11\ 11 \\ 327 \\ - 125 \\ \hline 196 \end{array}$$

Class Pets	
Dogs	